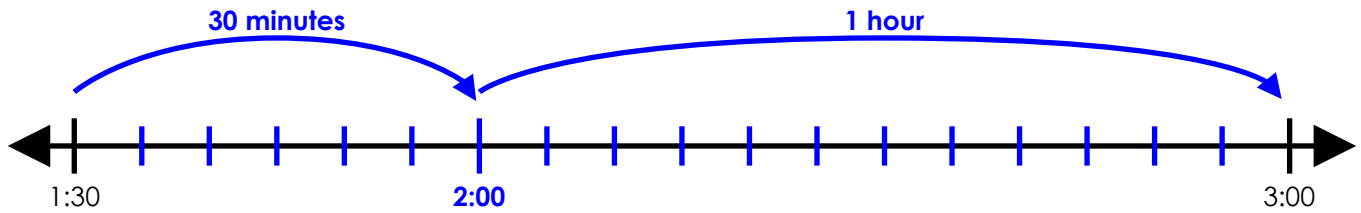


Name: _____

Elapsed Time Number Line

Start Time	End Time
1:30 pm	3:00 pm



elapsed time: 1 hour and 30 minutes



~ PREVIEW ~

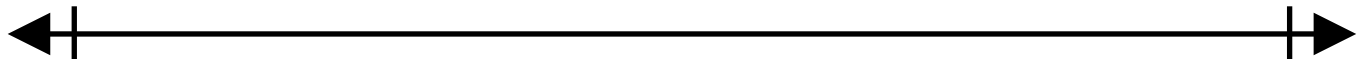
Please log in or register to download the printable version of this worksheet.



elapsed time: _____

b.

Start Time	End Time
3:30 am	5:30 am



elapsed time: _____

c.

Start Time	End Time
11:00 pm	1:30 am



elapsed time: _____


d.

Start Time	End Time
2:30 am	6:30 am



~ PREVIEW ~

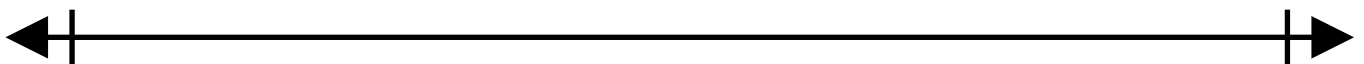
Please log in or register to download the printable version of this worksheet.



elapsed time: _____

★

Start Time	End Time
half past 7 am	half past 7 pm

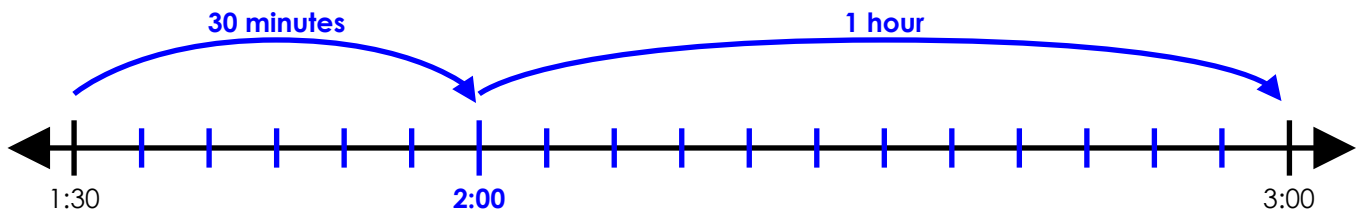


elapsed time: _____

ANSWER KEY

Elapsed Time Number Line

Start Time	End Time
1:30 pm	3:00 pm

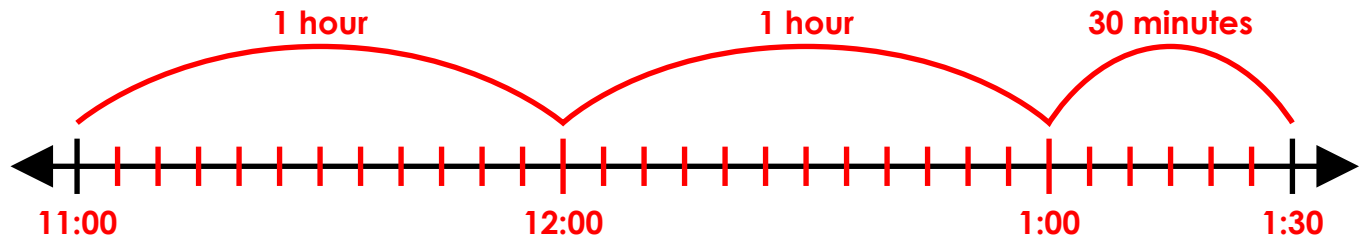


~ PREVIEW ~

Please log in or register to download
the printable version of this worksheet.

c.

Start Time	End Time
11:00 pm	1:30 am



elapsed time: 2 hours and 30 minutes

d.

Start Time	End Time
2:30 am	6:30 am

20 minutes 1 hour 1 hour 1 hour 20 minutes



~ PREVIEW ~

Please log in or register to download the printable version of this worksheet.

elapsed time: 2 hours